







Jun 12, 2019					
FINAL	R	H	E		WIN
 Rangers (36 - 31)	3	5	0		Matt Barnes (3 - 1) 3.62 ERA
 Red Sox (35 - 34)	4	10	1		LOSS Jesse Chavez (2 - 2) 3.62 ERA



1. The distance between each base on a baseball field is 90 feet. Last night the Boston Red Sox had 18 total bases. What is the combined distance between the total bases they earned in last night's game?

Answer: _____



2. If the Boston Red Sox sold 59 cheeseburgers per game, how many cheeseburgers would they sell after 19 games?.

Answer: _____



3. Last night Red Sox pitchers threw 67 fastballs and Rangers pitchers threw 83 fastballs. How many fastballs did both teams throw combined?

Answer: _____



4. Last night Boston Red Sox batters saw a total of 59 pitches. Boston Red Sox batters swung and missed a total of 20 pitches. What was the teams swing and miss rate?

Answer: _____



5. Last night Boston Red Sox had 33 at bats and 10 hits. What was their team hit percentage in last night's game (this is called their "batting average")?

Answer: _____



6. Last night Red Sox pitchers threw 58 breaking balls and Rangers pitchers threw 33 breaking balls. How many breaking balls did both teams throw combined?

Answer: _____

This Date in Red Sox History

June 12, 1919: Herb Pennock faced the minimum 27 batters in a 3-hit shutout of CWS...He benefitted from 2 double plays and 1 caught stealing, allowing 3 singles and 1 walk.